
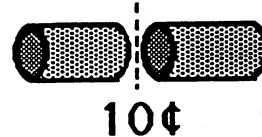


SUNSHINE MATH - 1
Venus, XIV

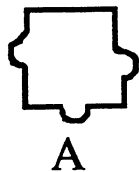
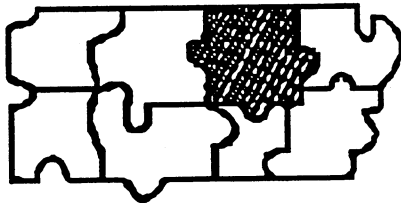
Name: _____
(This shows my own thinking.)

- ★★★★ 1. If it costs 10¢ to make 1 cut, how much does it cost to cut a log into 5 pieces?

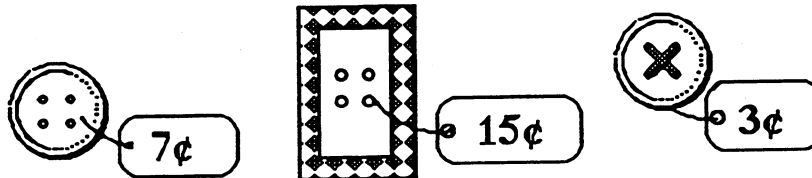
Answer: _____¢



- ★ 2. Look at the puzzle below, then circle the piece that will fit in the shaded area.



- ★★ 3. Circle the type of button that Keisha bought.
•The button costs more than a nickel, and
•The button costs less than a dime.






4. Bozo chewed a hole in Lu's homework. He chewed the numbers in the ones place, and the whole answer.
Circle the best *estimate* of the answer to the problem you can see.

- about 110
- about 60
- about 30




5. It takes 50 stars to make an American flag. If you laid 50 stars out in rows with 10 stars in each row, how many rows would you have?

Answer: _____ rows



6. A cat is asleep on a mat at a pet store. About how many curled-up cats can sleep on this mat, at one time?

Answer: about _____ cats



7. A kangaroo's tail is about as long as the kangaroo is tall. Draw the right size tail on this kangaroo.

