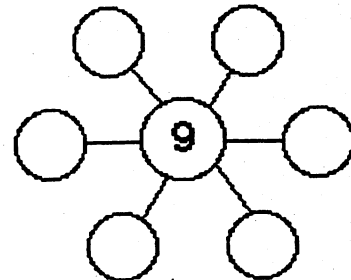


SUNSHINE MATH - 1
Venus, XVI

Name: _____

(This shows my own thinking.)

- ★★★ 1. Put 2, 3, 4, 6, 7 and 8 in the circles so that the sum along each line is 19. Use each number just once.



- ★★★ 2. Use the calendar to answer the questions.

January						
Sun	Mon	Tue	Wed	Thu	Fri	Sat
	1	2	3	4	5	6
7	8	9	10	11	12	13
14	15	16	17	18	19	20
21	22	23	24	25	26	27
28	29	30	31			

What date is the second Wednesday of the month?

Answer: _____

How many Saturdays are in January?

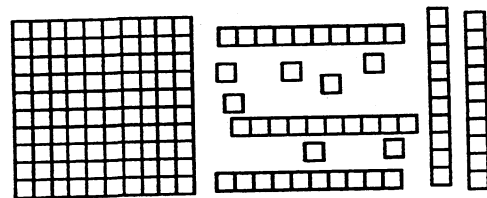
Answer: _____

What date is two days before the fourth Thursday?

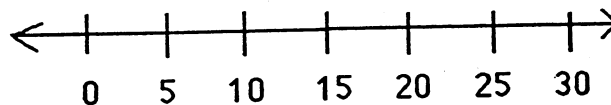
Answer: _____

- ★ 3. What numeral do the number blocks show?

Answer: _____




- ★★ 4. On a number line,





a. is 13 closer to 10 or 20? Answer: _____

b. is 28 closer to 20 or 30? Answer: _____

- ★★★★ 5. Use the picture graph about a class to answer the questions.



key:  = 2 boys
 = 2 girls

How many people like art best?

Answer: _____

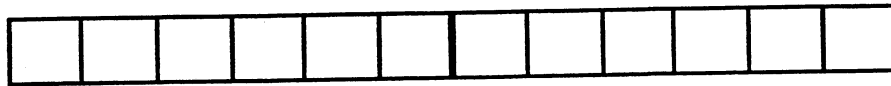

How many more people like music than reading?

Answer: _____

How many boys and how many girls are in the class?

Answer: _____ boys and _____ girls

- ★ 6. How long is the pencil? Each box is 1 centimeter long.



Answer: _____ centimeters

- ★ 7. Draw a pencil that is 3 centimeters shorter than the one above:

Draw it here: