




- ★★★ 1. Color the numbers the same color as the baskets where they belong! What numbers are left without a color?


Red less than 11	Green greater than 15 and less than 28	Blue greater than 36
↓	↓	↓
		

17	10	39	5	3	31
42	26	20	48	34	
29	19	2			

Answer: _____ do not belong in any basket.

- ★★ 2. Quan has a dime.
He finds a nickel.
He buys a pear for 13¢.
How much money does he have left?

Answer: He has _____ left.

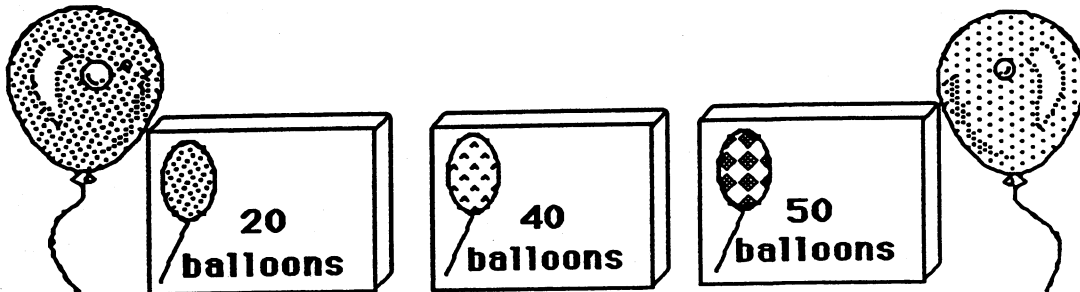


- ★★ 3. Find the number that goes in the box in part (a). Put it in the box for part (b). Write the answer to part (b) on the line.

a. $4 + \square = 7$


b. $\square + 8 = \underline{\hspace{2cm}}$

- ★★★ 4. You are having a party. You will need 70 balloons. Circle the boxes you could buy to make 70.




- ★ 5. You have 3 blocks. One is yellow, one is brown and one is green. Which block is green?

- The yellow block is in the middle.
- The brown block is on top.



Answer: The green block is _____.

- ★★ 6. How many triangles are there in all?



Answer: _____ triangles