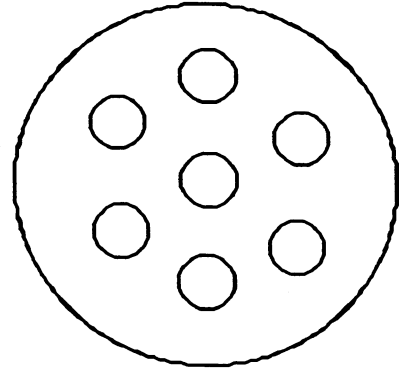
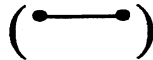


★★ 2. How many circles are there? (Total)

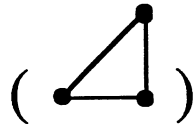


★★★ 3.


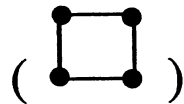
Connect 2 dots for a line.



Connect 3 dots for a triangle.



Connect 4 dots for a square.



★★★ 4. Write in the next number.

1 2 3 4 _____

3 4 5 6 _____

5 6 7 8 _____

★★★★ 5. Fill in the missing number in each row.

6 7 8 9 ___

6 ___ 8 9 10

6 7 ___ 9 10

6 7 8 ___ 10

★★★★ 6. If $A = 1$

$B = 2$

$C = 3$

$D = 4$

$E = 5$

$F = 6$

then $A+B+C =$ _____

(Parents: Reading the problem to your child is ALWAYS okay. If you help them solve the problems, please initial the problem and they will receive partial credit.)