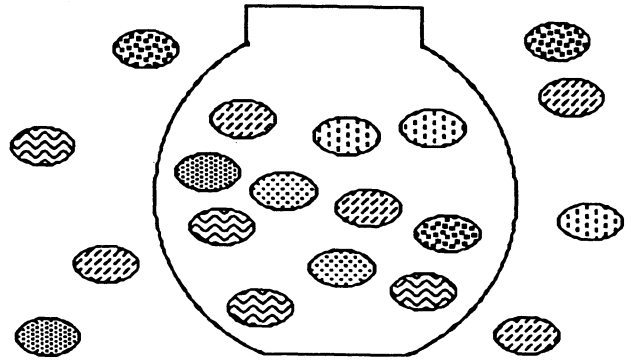
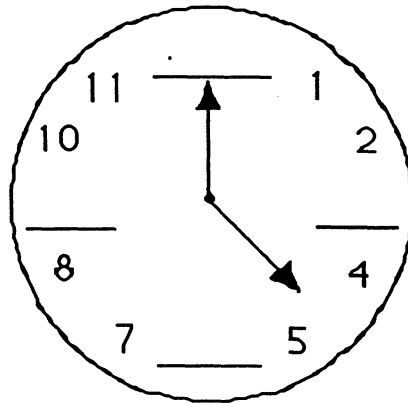


★ 1. _____
(FIRST NAME) (LAST NAME)

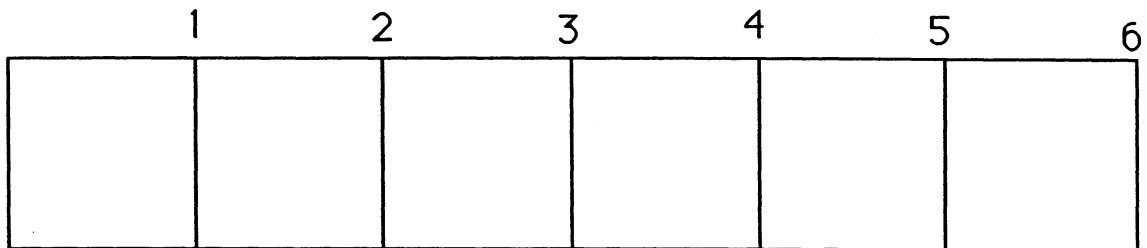
★ 2. How many
jellybeans
are in the
bowl?



★ 3. Fill in the
missing
numbers on
this clock.



★★ 4. Color in a segment that is 4 inches
long. (Each square is 1 inch long.)



★★★★ 5. How many letters are there in the alphabet? _____

| | | | | | | | | |
|---|---|---|---|---|---|---|---|---|
| A | B | C | D | E | F | G | H | I |
| J | K | L | M | N | O | P | Q | R |
| S | T | U | V | W | X | Y | Z | |

★★★★ 6. Circle Sunday, June 14.

| JUNE 1998 | | | | | | |
|-----------|--------|---------|-----------|----------|--------|----------|
| S | M | Tu | W | Th | F | S |
| Sunday | Monday | Tuesday | Wednesday | Thursday | Friday | Saturday |
| | 1 | 2 | 3 | 4 | 5 | 6 |
| 7 | 8 | 9 | 10 | 11 | 12 | 13 |
| 14 | 15 | 16 | 17 | 18 | 19 | 20 |
| 21 | 22 | 23 | 24 | 25 | 26 | 27 |
| 28 | 29 | 30 | | | | |

(Parents: Reading the problem to your child is ALWAYS okay. If you help them solve the problems, please initial the problem and they will receive partial credit.)